

Bridge Course - Post Test

Sub: Mathematics



Standard Three

Marks - 15

Student Name - .....

Q 1- Look at the pictures and write the numbers in words as well as in numerals.

Mark 1

Tens	Units
	
.....	

Q 2 Write the numbers before and after the following number.

Mark 1

	81	
--	----	--





Q 3 - Write the numbers in ascending and descending order. 51, 97, 79.

Mark 1

Ascending Order	
Descending Order	

Q 4 - Identify number step and write numbers.

Mark 1

Q5- There are 37 apples and 55 mangoes in a basket, then how many total fruits are there in the basket?

Mark 1

Tens	Units

Q 6 - Savita wants to read a book of 70 pages she had already read 44 pages now, then how many pages are still remain to read?

Mark 1

Tens	Units

Q 7 - Which notes and coins will have to be taken to get the given amount.  
Put  $\checkmark$  Mark in the box below.

Mark 1











Q 8- Measure the length of your text book with your palm and write in the box.

Mark 1

.....

Q 9 - Circle the heaviest object.

Mark 1



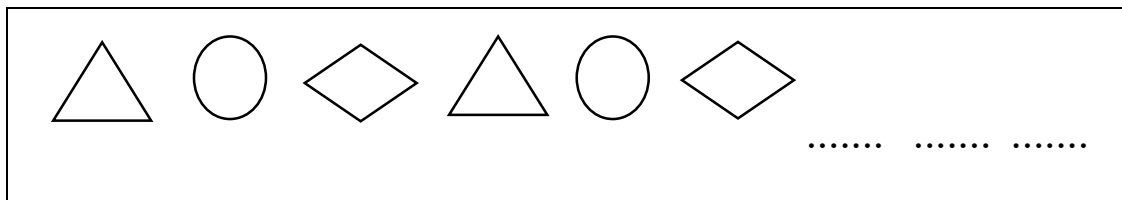
Q 10 - Which vessel will use to drink milk? Mark  $\checkmark$  in the box below that container.

Mark 1



Q 11 - Complete the pattern.

Mark 1



Q 12 - Fill in the blanks.

Mark 1



$$\square + \square + \square = \square$$

$$\square \times \square = \square$$

Q 13- Number of students of a school are given in the table as follows.

Marks 3

Std	Number of the students
First	
Second	
Third	
Fourth	

Answer the following questions with the help of above table.

1) In which standard maximum number of students are there? .....

2) How many students are there in third standard?

3) Which two standards have same number of students? .....