

पहिली - गणित (इंग्रजी माध्यम)



Maharashtra Academic Authority, Pune 30.

Educationally Progressive Maharashtra (EPM)

Test for Academic Progress : Summative Evaluation 2 : 2017-18

Standard : First - Subject : Mathematics (Written)

Student's Name : _____ Roll No. :

School's Name : _____ Div. : _____

Center : _____ Taluka : _____ District : _____ Date : ____ / ____ / 2018

Q. No.	1	2	3	4	5	Practical/ Oral	Total	Teacher's Signature
Marks Obtained								
Maximum Marks	4	4	4	4	4	10	30	

Solve all questions. Each sub-question carries one mark.

Q. 1 A) Colour two pictures.




B) Circle the bigger number.

3 7

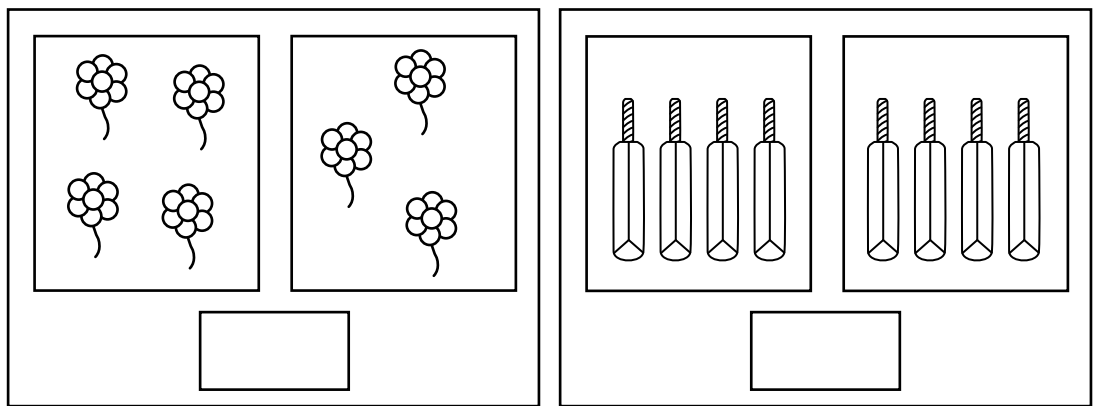
C) Write appropriate number in the blank box.

Before number	Middle number	After number
8	9	

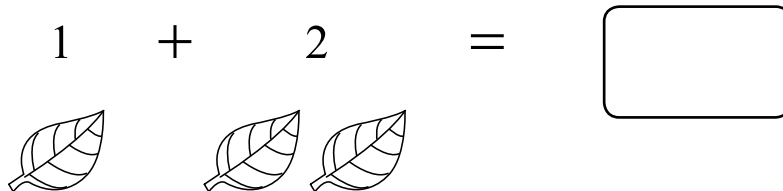
D) Count the pictures and circle the correct number.



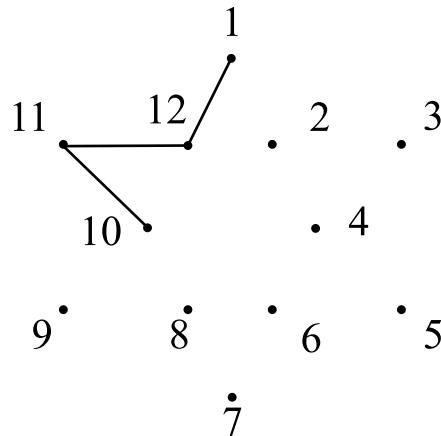
Q. 2 A) Make one to one pairs. If there are equal number of objects put a ✓ in a box below.



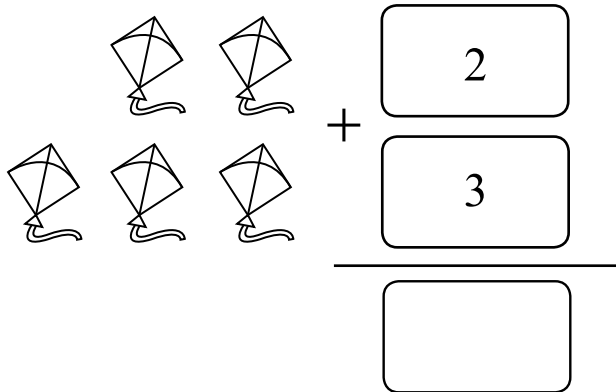
B) Add.



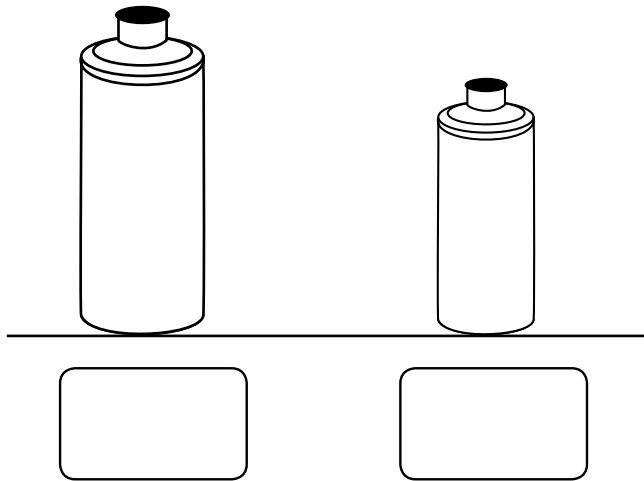
C) Join the number and complete the Rangoli.



D) Add.



Q. 3 A) Put ✓ mark in a square below the taller water bottle.




B) Write the number immediate before of given numbers.

	16	17
--	----	----

C) Circle the smaller number.

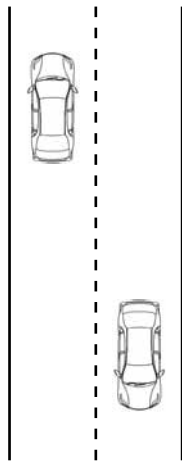
16 12

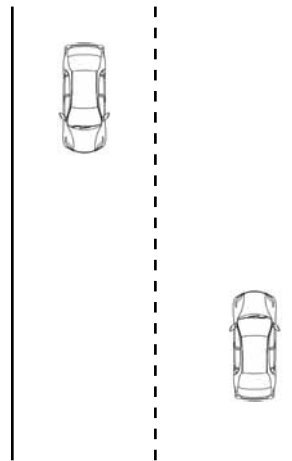
D) Count forward the leaves in the festoon and add them.



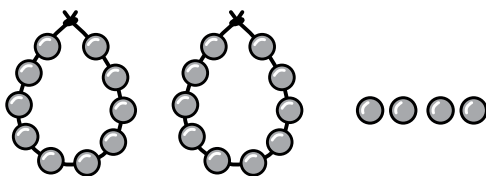
$$12 + 3 =$$

Q. 4 A) Put ✓ mark in the box below narrow road.





B) Count tens and ones beads and write total number.

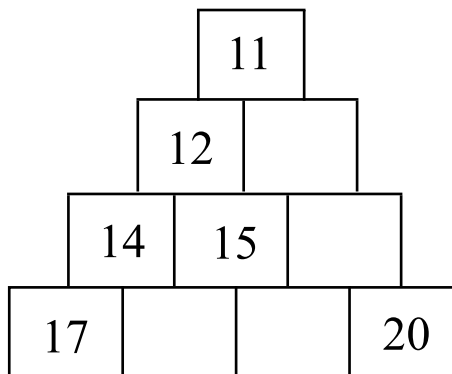


Tens	Ones

C) Subtract and write appropriate number in the square.

$$\begin{array}{|c|} \hline \begin{array}{|c|} \hline 7 \\ \hline \end{array} \\ \hline - \\ \hline \begin{array}{|c|} \hline 4 \\ \hline \end{array} \\ \hline \hline \square \\ \hline \end{array}$$

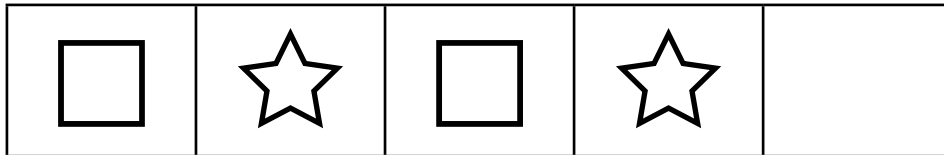
D) Write correct number in blank boxes of pyramid.




Q. 5 A) Write appropriate number in the square and subtract.

Sayee's tiffin has six laddoos		<div style="border: 1px solid black; width: 100%; height: 40px; margin-bottom: 5px;"></div>
	-	
She ate two laddoos		<div style="border: 1px solid black; width: 100%; height: 40px; margin-bottom: 5px;"></div>
		<hr style="border: 0.5px solid black;"/>
Laddoo's left in sayee's tiffin		<div style="border: 1px solid black; width: 100%; height: 40px;"></div>

B) Observe the given series and draw right figure in blank box.



Note : Observe the pictures given in the box and answer question C and D.



C) How many cups are there in the above box ?



D) Write number of balls from above box.

