

# दुसरी – गणित (इंग्रजी माध्यम)



**Maharashtra Academic Authority, Pune 30.**

**Educationally Progressive Maharashtra (EPM)**

**Test for Academic Progress : Summative Evaluation 2 : 2017-18**

**Standard : Second - Subject : Mathematics (Written)**

Student's Name : \_\_\_\_\_ Roll No. :


School's Name : \_\_\_\_\_ Div. : \_\_\_\_\_

Center : \_\_\_\_\_ Taluka : \_\_\_\_\_ District : \_\_\_\_\_ Date : \_\_\_\_ / \_\_\_\_ / 2018

Q. No.	1	2	3	4	5	Practical/ Oral	Total	Teacher's Signature
Marks Obtained								
Maximum Marks	4	4	4	4	4	10	30	

**Solve all questions. Each sub-question carries one mark.**

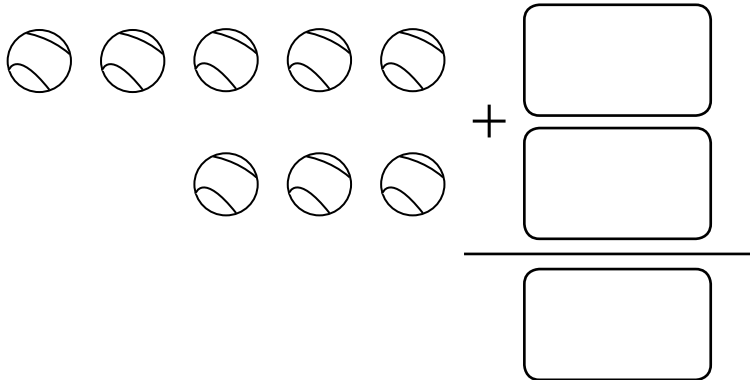
**Q. 1 A)** Count the pictures and write correct number in the box.



**B)** Write the middle number.


5		7
---	--	---

C) Make word problem of your own for the following addition.



D) Write the given numbers in order.

5 , 2 , 4 , 3 , 6



Q. 2 A) Write in words.

18 \_\_\_\_\_

B) Write in numbers.



Twenty three

C) Circle the smaller number.

45 , 54

D) Cancel the wrong word.

Number of mangoes are 2 less/more than number of apples.



Q. 3 A) Add.

Tens	Ones
6	3
+ 1	2

Q. 3 B) Add.

Tens	Ones
4	7
+ 1	5

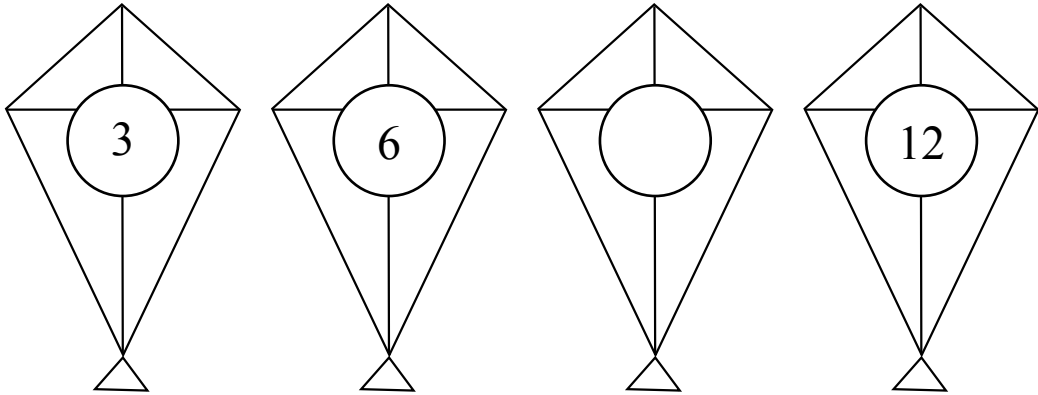
C) Subtract.

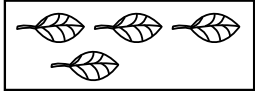
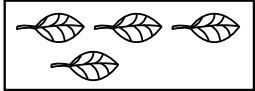
Tens	Ones
7	4
- 5	0

D) Subtract.

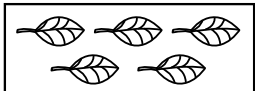
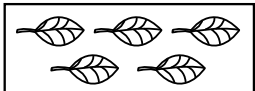
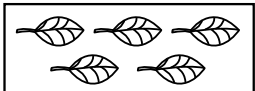
Tens	Ones
1	7
-	8

Q. 4 A) Complete the series of numbers.




B)   =  $4 \times 2$   
4 4

Similarly write correct number in the box.

   =  $5 \times$    
5 5 5

C) Write the total number of triangles from given figure.



Number of triangles =

D) Complete the following Series.

○ ○	○○ ○○	○○○ ○○○		○○○○○ ○○○○○
--------	----------	------------	--	----------------

Q. 5 A) Put a ✓ mark in the box where shopkeeper has received exact amount of money.


Rs.30 = 
 




Rs.15 = 
 



B) Write the given numbers in descending order.

24 , 83 , 35

, 
  ,

C) One fort has 63 steps. Uma climbed 34 steps, how many more steps she has to climb to reach the fort ?

Tens	Ones

- D)** In one cricket match, Virat scored 51 runs and Shikhar scored 19 runs.  
How many total runs are scored by both of them ?

Tens	Ones

